

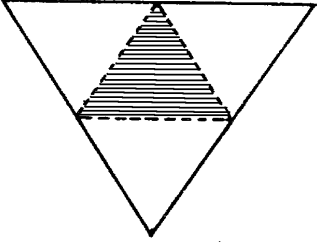
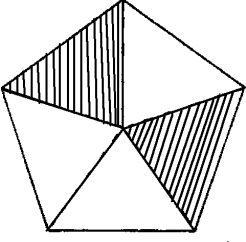
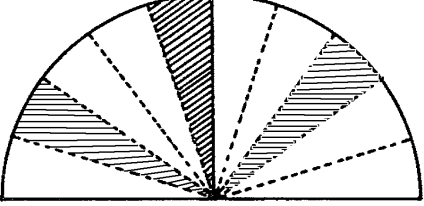

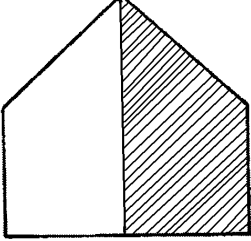
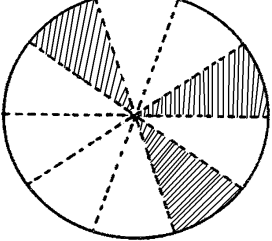
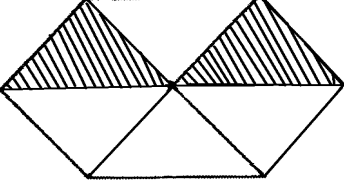
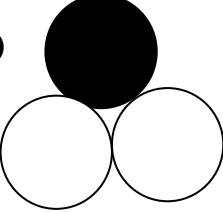

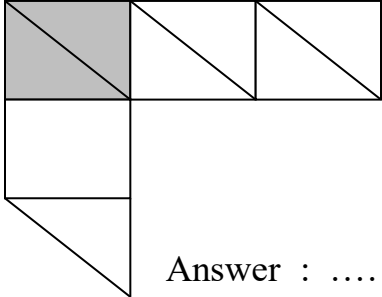
Name :

GRADE:

Revision exercises: Fractions

MATHEMATICS

What **fraction** is **not shaded (UNSHADED)** in each of the following diagrams?

<p>(a) </p> <p>Answer :</p>	<p>(b) </p> <p>Answer :</p>
<p>(c) </p> <p>Answer :</p>	<p>(d) </p> <p>Answer :</p>
<p>(e) </p> <p>Answer :</p>	<p>(f) </p> <p>Answer :</p>
<p>(g) </p> <p>Answer :</p>	<p>(h) </p> <p>Answer :</p>
<p>(i) </p> <p>Answer :</p>	<p>(j) </p> <p>Answer :</p>